



Province of the
EASTERN CAPE
EDUCATION

MOHATO WA MOTHEO

KEREITI YA 3

PUDUNGWANA 2014

MMETSE SESOTHO

MATSHWAO: 40

NAKO: hora

LEBITSO: _____



Pampiri ena e na le maqephe a 16.

DITAELO HO BAIHUTI:

1. Araba dipotso kaofela dibakeng kappa diforeimeng tseo o di filweng.
2. Tshebetso ya dipalo kaofela e bontshwe bukaneng ya dipotso e seng leqepheng le ka thoko.
3. Ha o a dumellwa ho sebedisa khalikhleitha.
4. Matshwao a teko a 40.
5. Nako ya teko ke metsotso e 60.
6. Tit jhere o tla o tataisa ka dipotso tsa boitokisetso.
7. Bala ditaelo ka hloko.

Mosebetsi wa boitokisetso wa 1:

Sebetso: $153 + 34$

$$100 + 50 + 3$$

$$100 + 000 = 100$$

$$000 + 30 + 4$$

kapa $50 + 30 = 80$

$$100 + 80 + 7$$

$$3 + 4 = 7$$

$$187$$

$$153 + 34 = 187$$

Mosebetsi wa boitokisetso wa 2:

Etsa sedikadikwe tlhakung e nepahetseng.

$$32 + 43 =$$

A 23

B 34

C 75

D 54

O arabile hantle ha o entse sedikadikwe ho C.

Teko e qala leqepheng le latelang.

DI POTSO:

I. Etsa sedikadikwe tlhakung ya dikarabo tse nepahetseng.

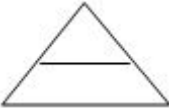
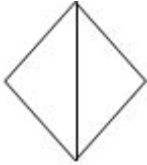
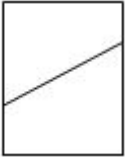
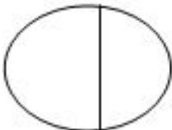
I.1 Ke mang boleng ba di jiti e sehelletsweng mola? 368

- A 3
- B 30
- C 300
- D 80

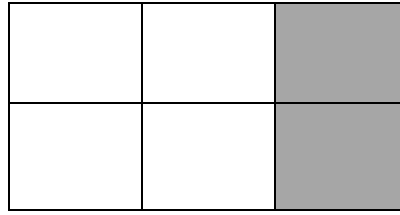
I.2 Atametsa 264 ho 10 .

- A 270
- B 266
- C 200
- D 260

I.3 Ke setshwantsho sefe se bontshang mola wa tekano-tshwano?

- A 
- B 
- C 
- D 

1.4 Ke karolwana efe e tlotsitsweng?



A $\frac{2}{4}$

B $\frac{2}{3}$

C $\frac{2}{6}$


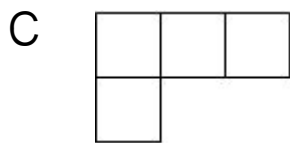
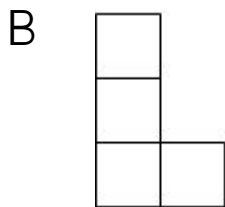
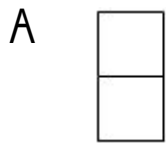
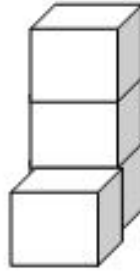
D $\frac{2}{5}$

1.5 Ke nako mang?



- A Metsotso e mmedi ka mora hora ya leshome.
 B Metsotso e leshome le metso e mmedi ka mora hora ya leshome.
 C Metsotso e leshome ka mora hora ya leshome.
 D Metsotso e mashome a mabedi ka mora hora ya leshome.

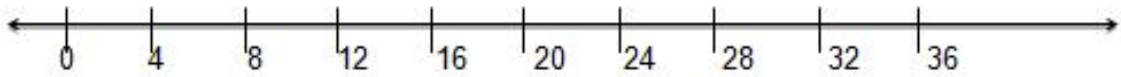
1.6 Tjhebeho ya ka hodimo ya setwhantsho sena ...



2. Ngola nomoro ena.

$$700 + 5 + 60 = \underline{\hspace{2cm}}$$

3. Bontsha 4×6 hodima mola palo.



4. Ngola nomoro ka mantswa:


382 = _____

5. Hlophisa dinomoro ho tloha ho e nyenyane ho isa ho e kgolo.

326, 632, 362, 623

_____, _____, _____, _____,

6. Ke phoofolo efe e boima ka ho fetisisa?



Phoofolo e boima ka ho fetisisa ke _____.

7. Qetella dipaterone tsa dinomoro 7.1 le 7.2.

7.1 550, 450, 350, _____, _____, _____




7.2 625, 650, 675, _____, _____, _____

8. Ngola nomoro makgolo a supileng le metso e mene.

9. Qetella dinomoro tse siilweng.

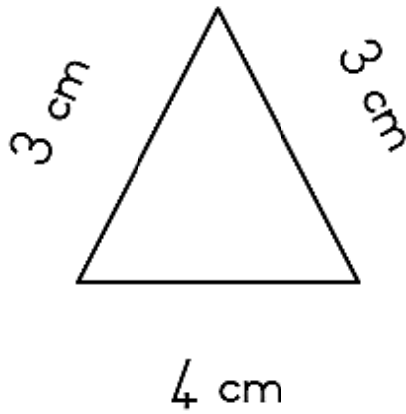
	Halof o ya nomoro	Nomoro	Pheta nomoro ha bedi
9.1		26	52
9.2	15	30	

10. 10.1 Qetella paterone ya dintso.

			
A	B	C	D

10.2 Ke didikadikwe tse kae ho paterone ya D? _____

11. Fumana perimitha ya sebopeho sena.




12. Fana ka lebitso la sebopeho sena.



13. E na ke ...




14. Shebisisa mela le dikholamo tse ka tlase o nto etsa polelo ya palo.




$$\underline{\quad\quad} \times 4 = 20$$

15. Etsa dipalo 15.1 le 15.2 o sebedisa mokgwa wa ho qhaqholla.


15.1 $273 + 47 =$




$$15.2 \quad 368 - 146 =$$




$$16. \quad 48 \times 3 =$$



17. Bashemane ba bane ba arolelana dipompong tse 20 ka ho lekana. Moshemane ka mong o fumana dipompong tse kae?



18. Ho na le dilamunu tse 17 sefateng ka seng. Dilamunu di kae ha di le kaofela?







$$\underline{\hspace{2cm}} + \underline{\hspace{2cm}} + \underline{\hspace{2cm}} = \underline{\hspace{2cm}}.$$

19. Qetella:

$$R2,56 = \underline{\hspace{2cm}}c$$

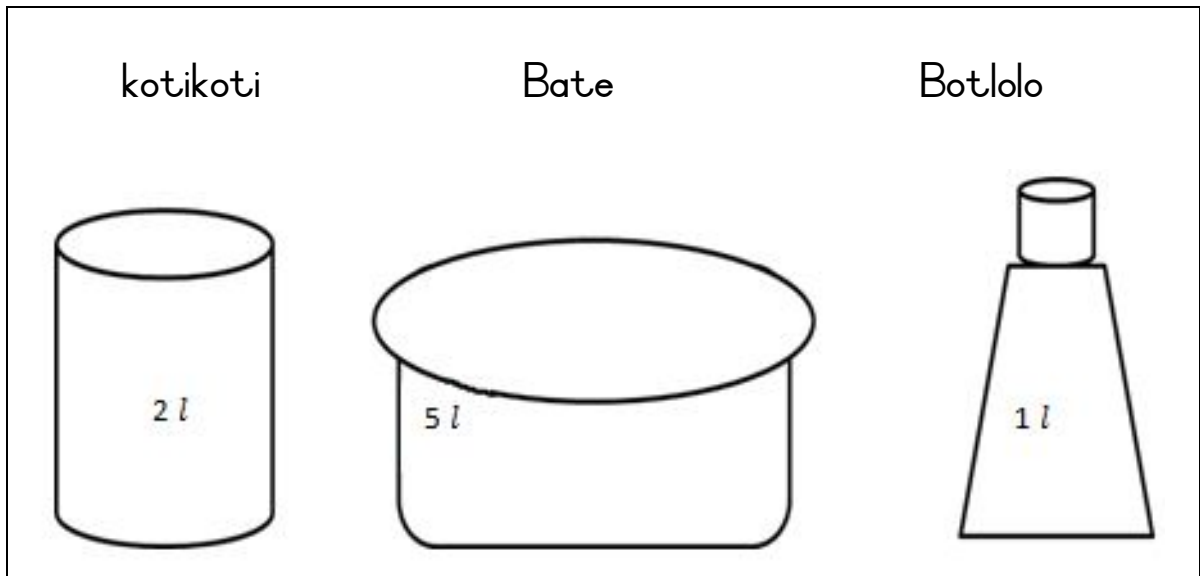
20. Bala ka hloko lethathama la di jo la Ben's Fast Foods o nto araba dipotso tse tla latela.

<u>BEN'S FAST FOOD</u>		
	Packet of chips	R6,40
	Hamburger	R18,00
	Hotdog	R2,10
	Milkshake	R6,00

Nel o rekile hamburger a lefa ka R50,00. Tjhent jhe ya hae e tla ba bokae?

Tjhent jhe ya Nel ke _____.

21 Shebisisa ditshwantsho tse latelang o nto araba dipotso.



Ke dibotlolo tse kae tse tlatsang kotikoti?

Kotikoti e ka tlala ka dibotlolo tse _____

22. Sebedisa khalendara ya kgwedi ya April ho araba dipotso.

APRIL 2014						
Mantaha	Labobedi	Laboraro	Labone	Labohlano	Moqebelo	Sontaha
	1	2	3	4	5	6 Letsatsi la tswalo la Jessica
7	8	9	10	11 Letsatsi la tswalo la mma Jessica	12	13
14	15	16	17	18 <i>Labohlano le halalelang</i>	19	20
21 <i>Letsatsi la malapa</i>	22	23	24	25	26	27 <i>Letsatsi la Tokoloho</i>
28 <i>Letsatsi la phomolo</i>	29	30				

22.1 Ke matsatsi a makae a pakeng tsa letsatsi la tswalo la Jessica le la mme wa hae?

22.2 Ke matsatsi a makae a phomolo kgweding ena ya April?

23. Keraf'o ya dint'ho e bontsha lenane la baithuti ba Grade 3A ba bapalang dipapadi.



Dipapadi tsa bana				
Lenane la bana				
	Bolo ya maoto	Mabelo	Bolo e motopo	Hoki

23.1 Ke papadi efe e bapalwang ho feta tse ding?

23.2 Ke baithuti ba bakae ba bapalang hoki?

MATSHWAO KAOFELA: 40